

Show your work

Box Your Answers

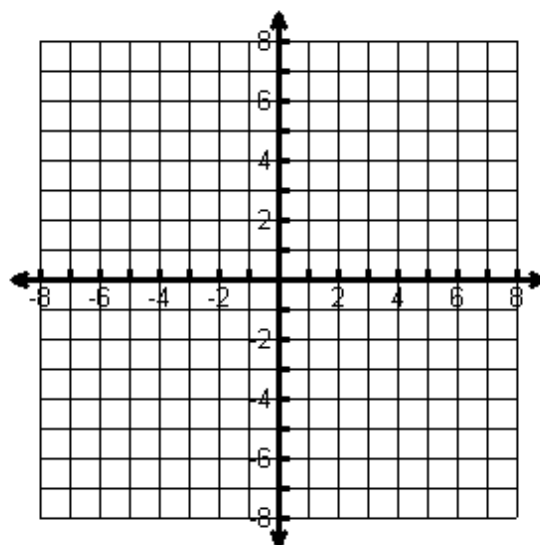
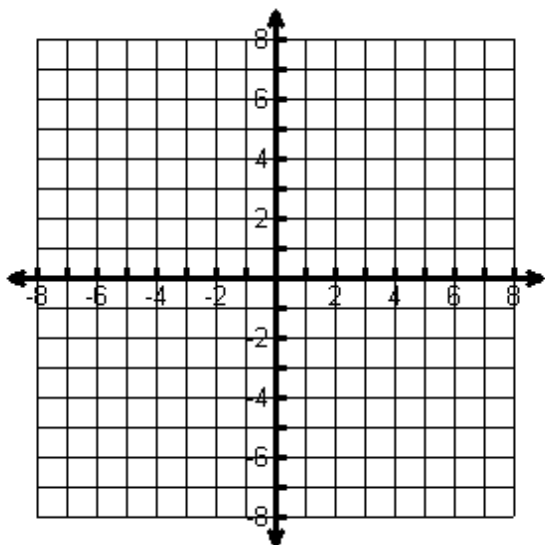
Calculators Allowed

Simplify All Fractions

For questions 1-2, graph the two lines given below and find their EXACT point of intersection. You may have to use algebra or your graphing calculator if the intersection is not at integer coordinates.

1) $y = -3x + 2$ and $y = \frac{2}{3}x - 5$

2) $y - 4 = \frac{1}{2}(x + 3)$ and $2x + 5y = 14$



Solve the systems of equations using substitution or elimination. (find the one point that works in both equations.

Remember, there could be 0, 1 or infinite solutions).

3) $6x + 4y = -8$

$$y = \frac{1}{2}x + 2$$

4) $2x + 5y = 31$

$$4x - y = 7$$

5) $6x - 4y = 10$

$$-9x + 6y = -15$$

SECTION #3 Due on Tuesday, September 4th at the start of class

Graded based on correctness

For questions 6-9, you may solve the system of equations using any method you prefer.

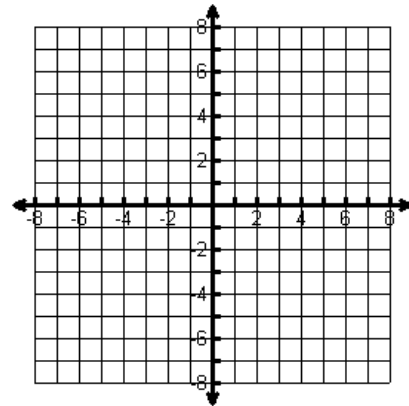
6)
$$\begin{aligned} 3x - 4y &= -1 \\ -6x + 8y &= 2 \end{aligned}$$

7)
$$\begin{aligned} x + 3y &= -4 \\ 3x + 2y &= 3 \end{aligned}$$

8)
$$\begin{aligned} 2x + y &= 5 \\ y + 2x &= 7 \end{aligned}$$

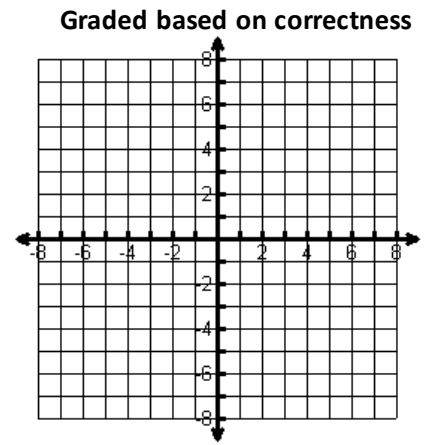
9)
$$\begin{aligned} 6x + 8y &= 39 \\ y &= 2x - 2 \end{aligned}$$

10) Given an example of system of equations with **no solutions**.
Your example can be a graphing example OR you can list two equations that have no solutions.



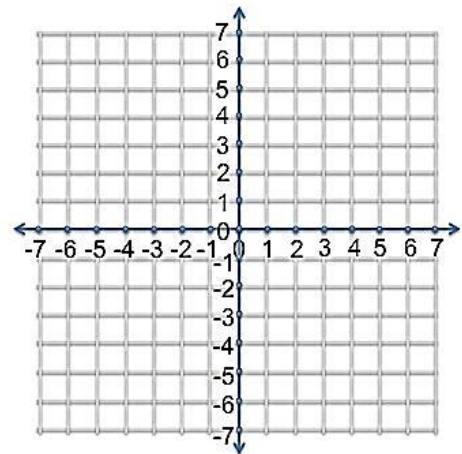
SECTION #3 Due on Tuesday, September 4th at the start of class

11) Given an example of system of equations with a solution at $(-2, 7)$. You can use the coordinate plane to the right as a guide, but must list two equations that have the point as a solution.



12) Graph the system of linear inequalities and identify the solution.

$$2x - y > -4$$
$$x \geq 0$$



13) Graph the system of linear inequalities and identify the solution.

$$y > \frac{5}{6}x - 3$$
$$y \geq \frac{-2}{3}x + 4$$

